

# UNIDAD 3

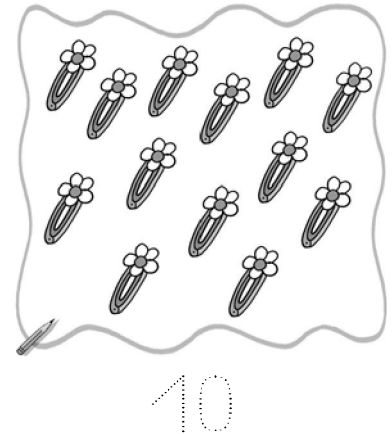
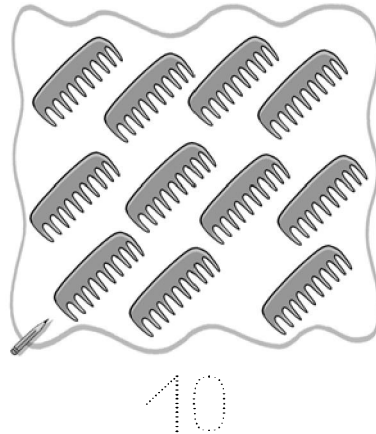
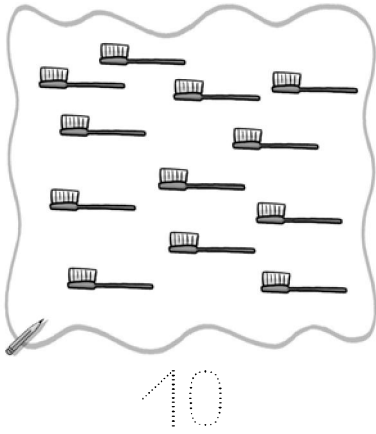
## Matemáticas

EV

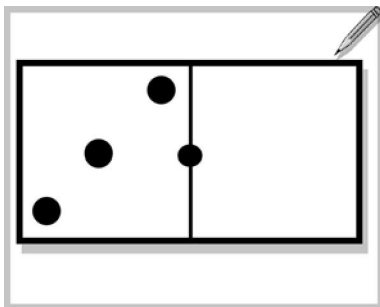
Nombre y apellidos: .....

Curso: ..... Fecha: .....

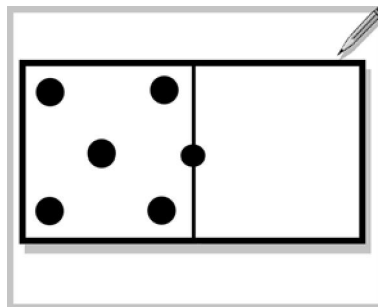
● Tacha los que sobran para que haya 10 y repasa.



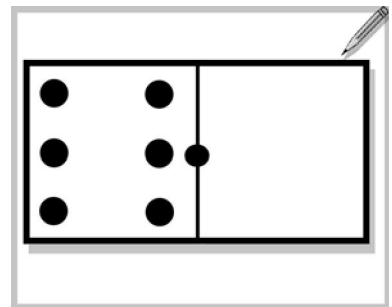
● Dibuja los puntos que faltan y completa las sumas.



$$\square + 3 = \square$$





$$\square + 4 = \square$$



$$\square + 2 = \square$$

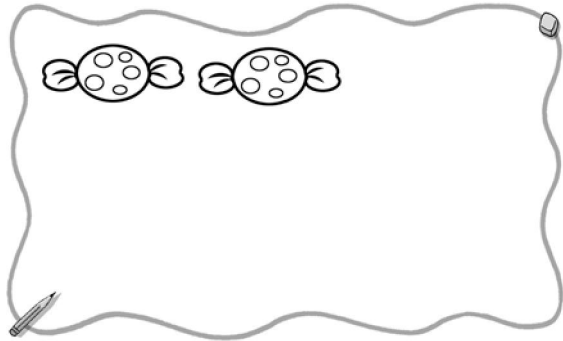
● Forma grupos de 10 y tacha las que sobran de cada grupo.



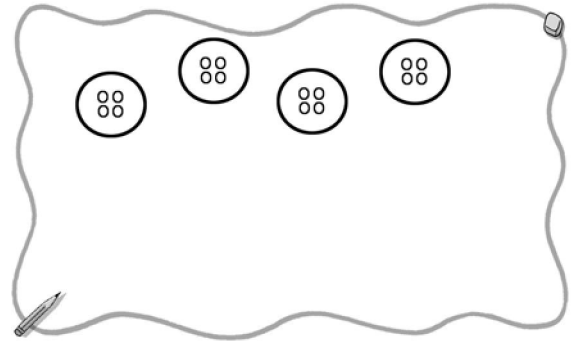
Nombre y apellidos: .....

Curso: ..... Fecha: .....

- Dibuja para que haya 10 y completa las sumas.



$$2 + \square = 10$$



$$4 + \square = 10$$

- Tacha las medidas que no corresponden a los dibujos.



3 pies - 3 pasos



3 palmos - 3 pasos

- Tacha la suma incorrecta y escribela bien.

$$\begin{array}{r} 5 \\ + 2 \\ \hline 7 \end{array}$$

$$\begin{array}{r} 4 \\ + 3 \\ \hline 7 \end{array}$$

$$\begin{array}{r} 5 \\ + 4 \\ \hline 8 \end{array}$$

$$\begin{array}{r} 6 \\ + 2 \\ \hline 8 \end{array}$$

$$\begin{array}{r} \square \\ + \square \\ \hline \square \end{array}$$